


Talking Turkey


Standard:

M2N2.a Correctly add two whole numbers up to three digits with regrouping.

1. Choose a turkey addition card.
2. Record the addition problem onto the Talking Turkey recording sheet. Make sure you record the addition problem under the correct letter.
3. Solve the addition problem.



Talking Turkey



A.

<input type="text"/>	<input type="text"/>	<input type="text"/>
<input type="text"/>	<input type="text"/>	<input type="text"/>
+		
<hr/>		
<input type="text"/>	<input type="text"/>	<input type="text"/>

B.

<input type="text"/>	<input type="text"/>	<input type="text"/>
<input type="text"/>	<input type="text"/>	<input type="text"/>
+		
<hr/>		
<input type="text"/>	<input type="text"/>	<input type="text"/>

C.

<input type="text"/>	<input type="text"/>	<input type="text"/>
<input type="text"/>	<input type="text"/>	<input type="text"/>
+		
<hr/>		
<input type="text"/>	<input type="text"/>	<input type="text"/>

D.

<input type="text"/>	<input type="text"/>	<input type="text"/>
<input type="text"/>	<input type="text"/>	<input type="text"/>
+		
<hr/>		
<input type="text"/>	<input type="text"/>	<input type="text"/>

E.

<input type="text"/>	<input type="text"/>	<input type="text"/>
<input type="text"/>	<input type="text"/>	<input type="text"/>
+		
<hr/>		
<input type="text"/>	<input type="text"/>	<input type="text"/>

F.


<input type="text"/>	<input type="text"/>	<input type="text"/>
<input type="text"/>	<input type="text"/>	<input type="text"/>
+		
<hr/>		
<input type="text"/>	<input type="text"/>	<input type="text"/>

G.

<input type="text"/>	<input type="text"/>	<input type="text"/>
<input type="text"/>	<input type="text"/>	<input type="text"/>
+		
<hr/>		
<input type="text"/>	<input type="text"/>	<input type="text"/>

H.

<input type="text"/>	<input type="text"/>	<input type="text"/>
<input type="text"/>	<input type="text"/>	<input type="text"/>
+		
<hr/>		
<input type="text"/>	<input type="text"/>	<input type="text"/>




A.

$$235 + 248$$




B.

$$336 + 309$$




C.

$$289 + 80$$




D.

$$102 + 378$$




E.

$$545 + 205$$




F.

$$264 + 663$$



G.

$$453 + 253$$



H.

$$576 + 15$$